

Name Lars

Date 6-7-05

1. Naim has 6 marbles.

Yoani has 3 more marbles than Naim.

How many marbles does Yoani have? 9

R: V

Q: How many marbles does Yoani have?


D: 6 3 more

$$6 + 3 = 9$$

P:

N	○	○	○	○	○	○	○
Y	○	○	○	○	○	○	○

A: 9

✓: 

LARS

2. How many marbles do Naim and Yoani have altogether? 15

R: ✓

Q:

D: 9 6

$$9 + 6 = 15$$



P:

N	0	0	0	0	0	0	0
Y	0	0	0	0	0	0	0

A: 15

✓ ✓

P:



Name: Lars

Date: 8

2. How many marbles do Jessica and Xiola have 11 altogether?

R: ✓

Q: How many do J. and X.
a. t.

D: $7-x$ $4-x$

P:
$$\begin{array}{r} 5 \overline{) 0000} \\ \times 100000000 \end{array}$$
  $+ 4 = 11$

A: 11 J. a. X.

✓: ✓ h. 11 m. a.

Name: Lars

Date: 8

1. Xiola has 7 marbles.

Jessica has 3 fewer marbles than Xiola.

How many marbles does Jessica have? 4

R: ✓

Q: How many marbles does J. have?

D: 7 ~~3 fewer~~

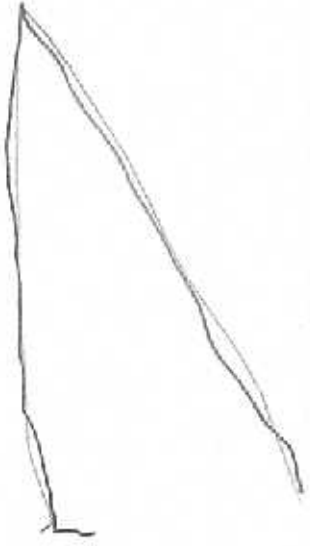
P:
$$\begin{array}{r} J \mid 0000 \\ \hline X \mid 00000000 \end{array}$$

$$7 - 3 = 4$$

A: 4 J. has 4 m

✓: ✓

Z-3=4



P:

