

Name Paola Campos

Date 5-7-08

1. Naim has 6 marbles.

Yoani has 3 more marbles than Naim.

How many marbles does Yoani have? 9

R✓

Q: how many marbles does Yoani have?

D: Six three more

$$6 + 3 = 9$$

P: 

N		○	○	○	○	○	○	○	
Y		○	○	○	○	○	○	○	○

A: yoani has nine marbles.

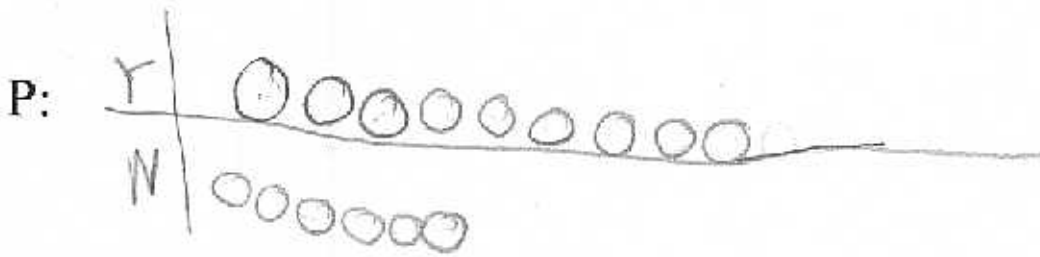
V: ✓

Paola Campos

2. How many marbles do Naim and Yoani have altogether? 15

Q: How many marbles do N and Y have all together?


D: No 9x



A: 15

✓: ✓

P:



Name: Paola

Date: 6-20-05

2. How many marbles do Jessica and Xiola have altogether?

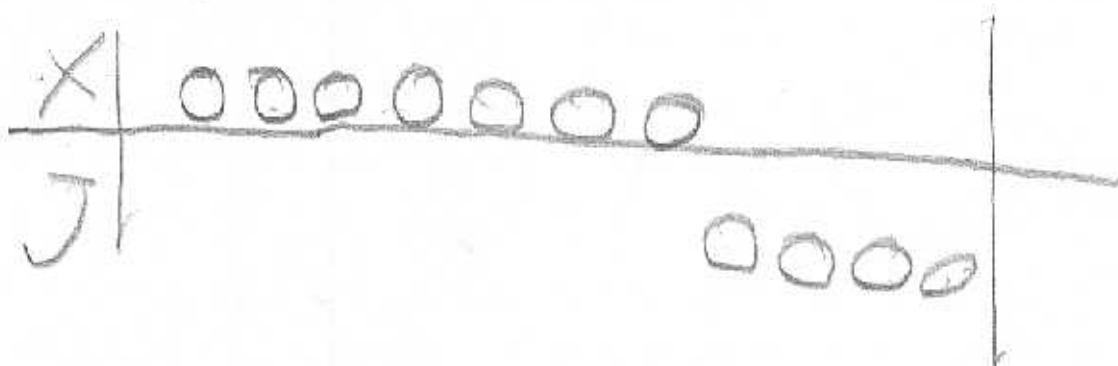
R✓

Q: how many do J and X have all together?

D:  $\begin{array}{r} 7 \\ \times \\ \hline \end{array}$  4 J

$$7 + 4 = 11$$

P:



A: 11 Jessica and Xiola have 11  
✓ Marbles altogether

Name: Paolo

Date: 6-20-05

1. Xiola has 7 marbles.

Jessica has 3 fewer marbles than Xiola.

How many marbles does Jessica have? 4

R

Q: how many marbles does J have?

D: 7 3 fewer

P: 

$$7 - 3 = 4$$

A: 4 Jessica has four marbles.

✓

P:

