

Name Yoani

Date 6-7-05

1. Naim has 6 marbles.

Yoani has 3 more marbles than Naim.

How many marbles does Yoani have? 9

Q: How many marbles does Yoani have?

D: 3 more $6 + 3 = 9$

~~P: _____~~

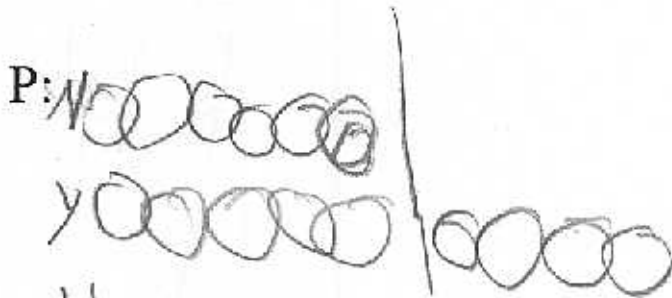
A: $6 + 3 = 9$

V: How many do they have
9 altogether

2. How many marbles do Naim and Yoani have altogether? _____

Q:

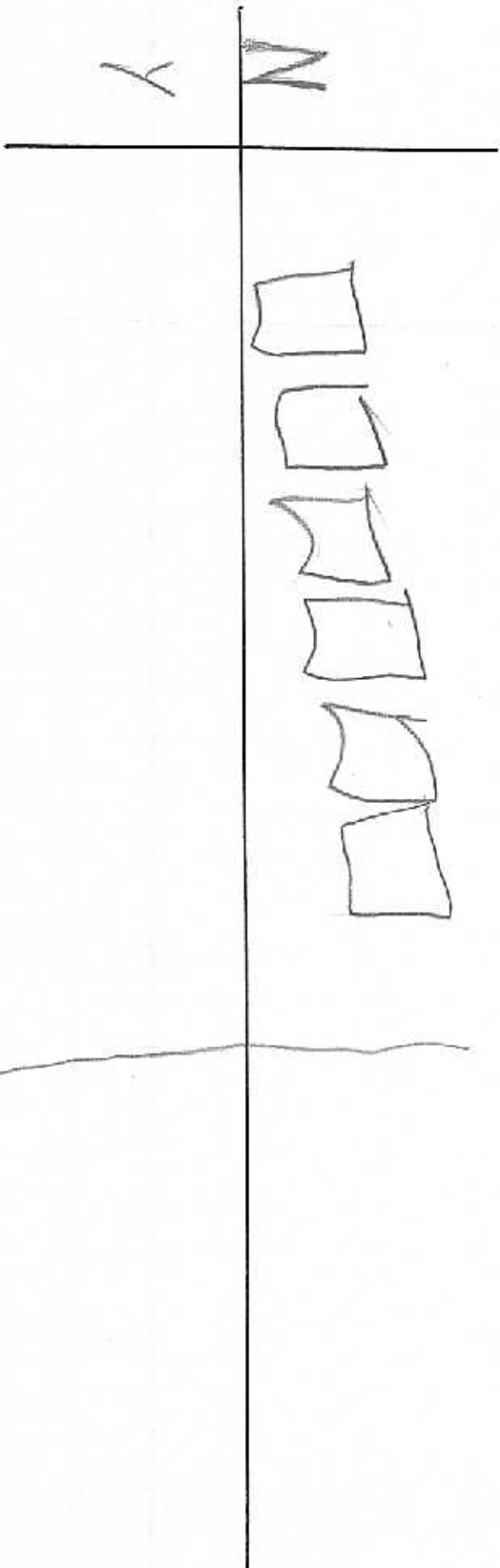
D: $9 + 6 = 15$

P: 

A: 15

✓

P:



Name: Yanni

Date: 6-8-95

1. Xiola has 7 marbles.

Jessica has 3 fewer marbles than Xiola.

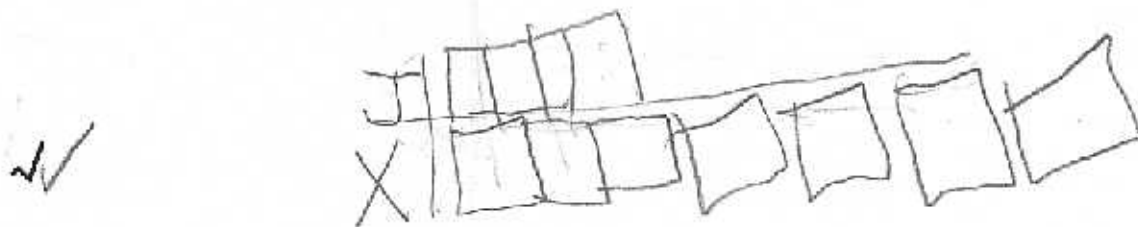
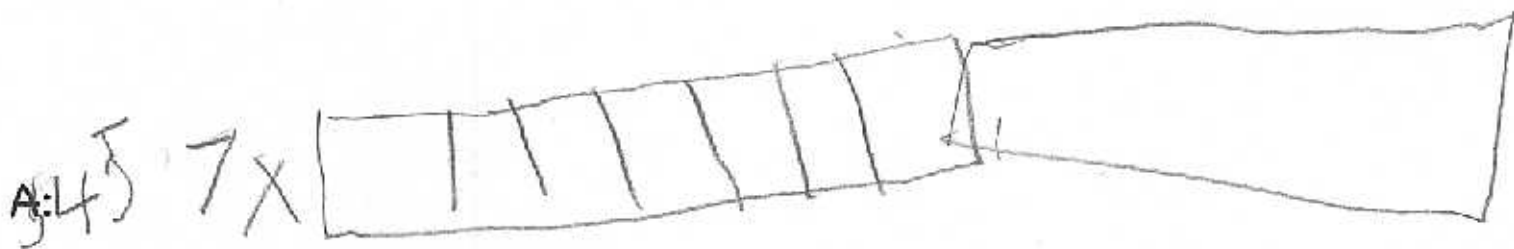
How many marbles does Jessica have? 4

R✓

Q: How

D: $7 - 3 = 4$

P: $7 - 4 = 10$



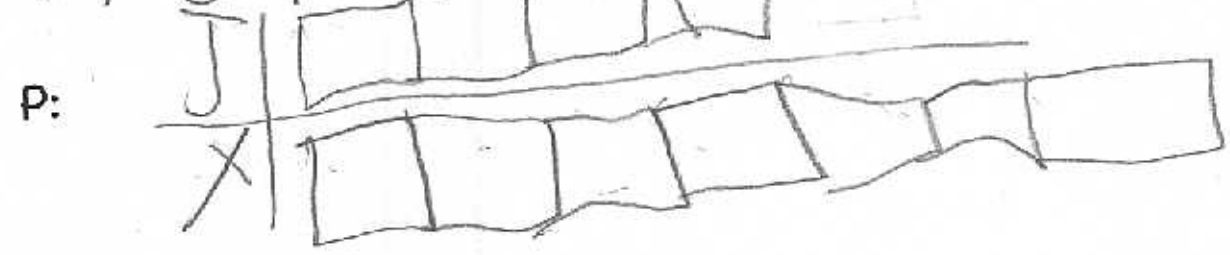
Name: Xeni

Date: _____

2. How many marbles do Jessica and Xiola have altogether?

Q: How many marbles do Jessica and Xiola have altogether?

D: X J A



A: $4 + 7 = 11$

✓✓

P:

X

T

