








Alex

Use manipulatives to fill in the chart and ask comparison questions.





		
24	12	5

Compute:



How many more  than  ?

Q: How many more  than  ?

D:

24 	12 	24 
	12 	?


P: $24 \triangle - 12 \square = ?$

A: There are 12 more  than .

V: $12 + 12 = 24$

$24 - 12 = 12$

Alex



Use manipulatives to fill in the chart and ask comparison questions.

24	12	5

Make your own comparison.

Q: How many less than ?

D: 24
5

24	
5	

P: $24 - 5 = ?$

A: There are 19 more than !

V: $19 + 5 = 24$
 $24 - 5 = 19$