




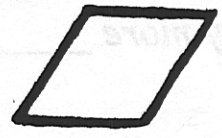
Kat

$$\begin{array}{r} 12 \\ - 8 \\ \hline 4 \end{array}$$

Use manipulatives to fill in the chart and ask comparison questions.


		
24	12	5

Compute:



Q: How many *less* \_\_\_\_\_ than \_\_\_\_\_ ?



D:



P:

$$12 - 5 =$$

A:

There are 7 less  than .

V:


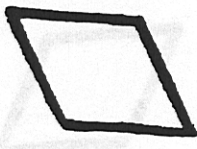

$$7 + 5 = 12$$

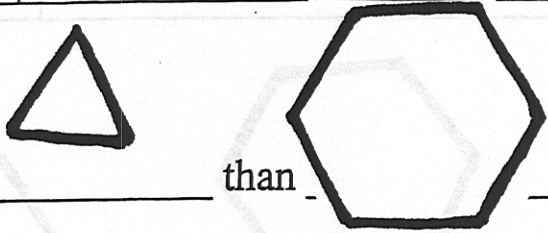
$$5 + 7 = 12$$

$$12 - 5 = 7$$

$$12 - 7 = 5$$

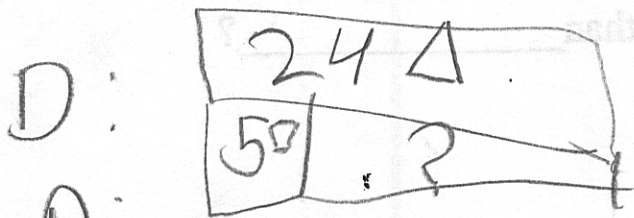
Use manipulatives to fill in the chart and ask comparison questions.

		
24	12	5



Compute:

Q: How many more                      than                     ?



P:  $24 - 5 =$

A: There are 19 more  $\Delta$  than  $\square$ .

✓  $19 + 5 = 24$

$5 + 19 = 24$

$24 - 19 = 5$

$24 - 5 = 19$