




Kcft

Use manipulatives to fill in the chart and ask comparison questions.

		
24 Δ	12 \square	5 Δ

Penny has 24 Δ Shaped carrot sticks
Big Nose has 12 \square Shaped carrot sticks

Make your own comparison.

Q: How many more carrot sticks does penny have.

D:

24 Δ		
12 \square		?

P: $24 - 12 =$

A: Penny has 12 more carrot sticks.

\checkmark : $12 \times 2 = 24$