

CIANA

Angelica had 7 silkworms.

Sue had 2 more silkworms than Angelica.

How many silkworms did Sue have? 9

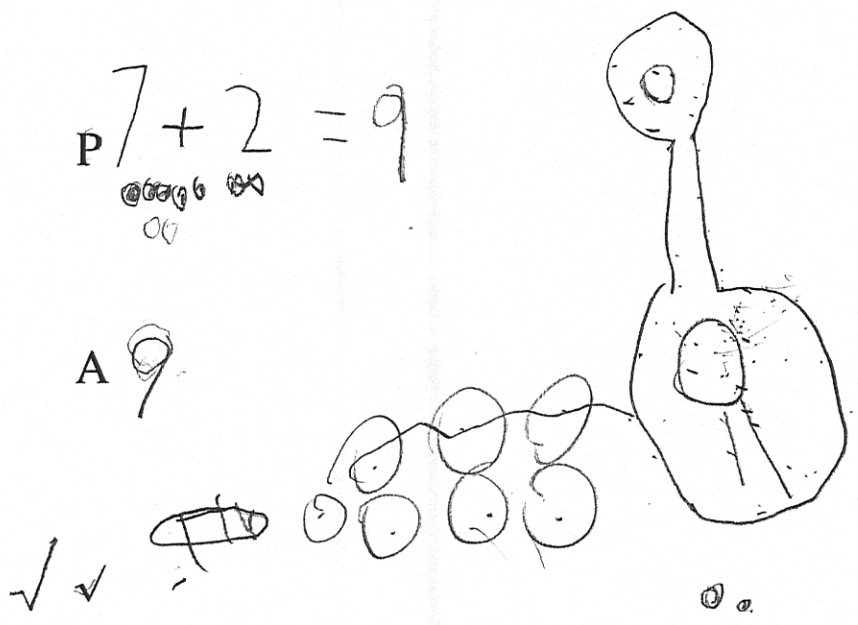
Q How many silkworms did Sue have?



D 7 2

P $7 + 2 = 9$

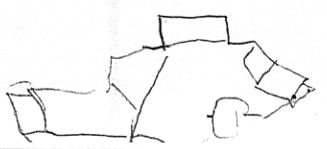
A 9



How many silkworms did Angelica and Sue have altogether?

How many silkworms did Angelica have altogether?

P $7 + 2 + 9 = 12$



Jane found 6 snails.

C 1AAA

Madeline found 3 more snails than Jane.



How many snails did Madeline find? 9

Q How many shd i/did Madeline find

D bc

P $6 + 3 = 9$

A 9



How many snails did Jane and Madeline find altogether? 9